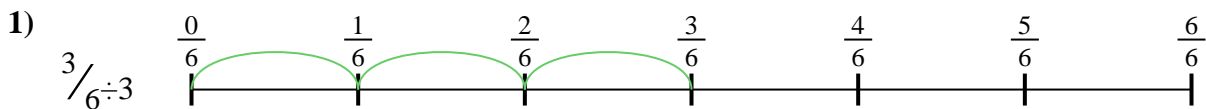





Use the numberline to solve each problem. The first is marked for you.

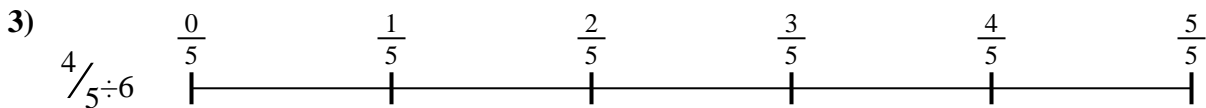
**Answers**



1. \_\_\_\_\_




2. \_\_\_\_\_



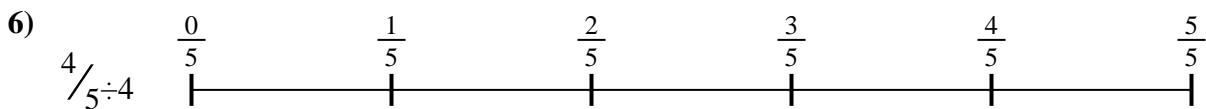
3. \_\_\_\_\_




4. \_\_\_\_\_



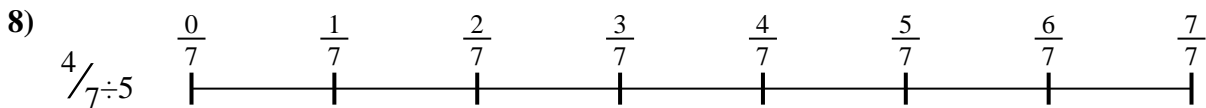
5. \_\_\_\_\_



6. \_\_\_\_\_



7. \_\_\_\_\_



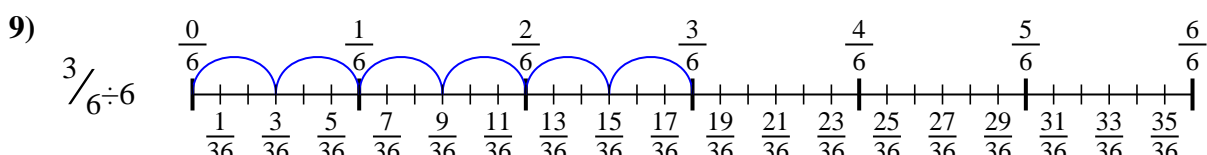
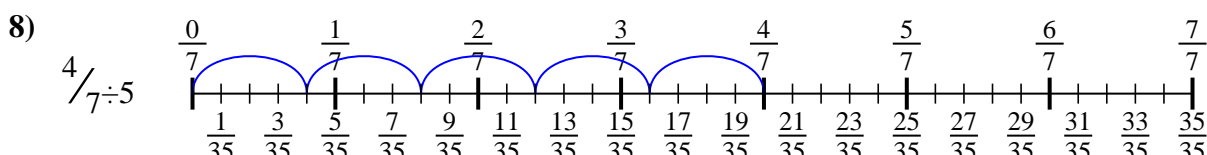
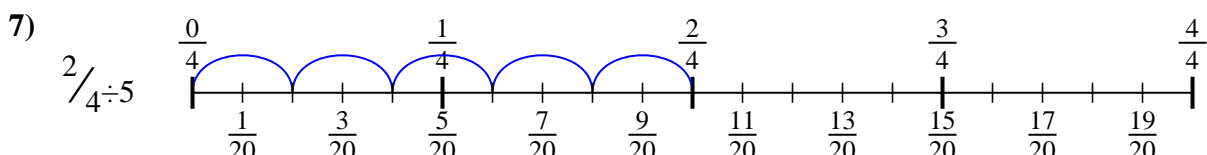
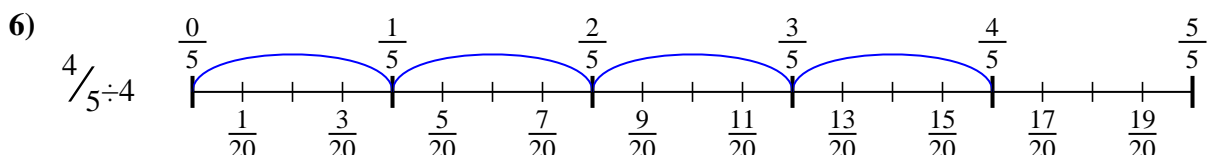
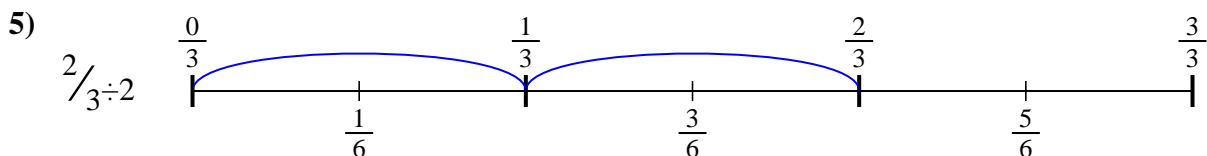
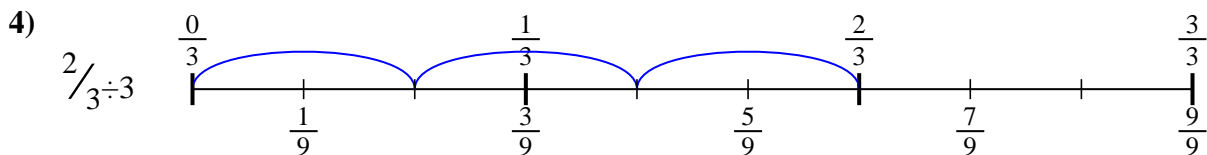
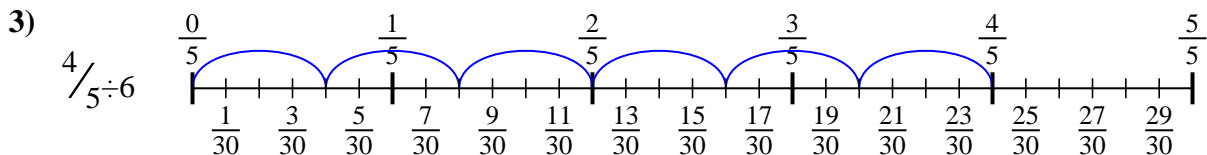
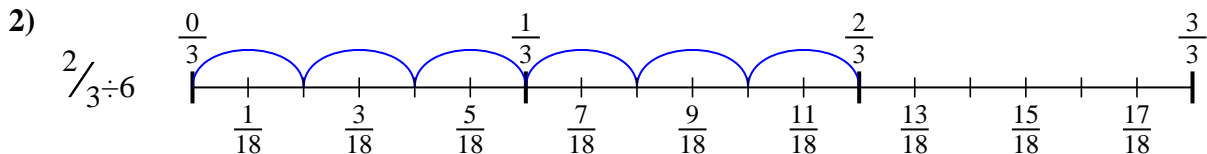
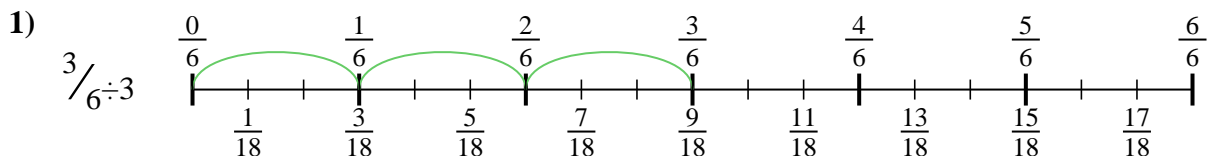
8. \_\_\_\_\_



9. \_\_\_\_\_



Use the numberline to solve each problem. The first is marked for you.



**Answers**

1.  $\frac{3}{18}$

2.  $\frac{2}{18}$

3.  $\frac{4}{30}$

4.  $\frac{2}{9}$

5.  $\frac{2}{6}$

6.  $\frac{4}{20}$

7.  $\frac{2}{20}$

8.  $\frac{4}{35}$

9.  $\frac{3}{36}$



Use the numberline to solve each problem. The first is marked for you.

**Answers**

$4/35$

$2/20$

$4/20$

$2/18$

$2/9$

$3/18$

$4/30$

$2/6$

$3/36$

1. \_\_\_\_\_

2. \_\_\_\_\_

3. \_\_\_\_\_

4. \_\_\_\_\_

5. \_\_\_\_\_

6. \_\_\_\_\_

7. \_\_\_\_\_

8. \_\_\_\_\_

9. \_\_\_\_\_

1)

2)

3)

4)

5)

6)

7)

8)

9)